

NS3-30 Skip Counting by 5s and 10s

1. Underline the ones digit of the numbers you say when skip counting by 5s.

a) 5 , 10 , 15 , 20 , 25 , 30

Write the pattern in the ones digits. 5 , 0 , _____ , _____ , _____ , _____

b) 35 , 40 , 45 , 50 , 55 , 60

Write the pattern in the ones digits. _____ , _____ , _____ , _____ , _____ , _____

2. Circle the numbers you say when skip counting by 5s starting at 5.

17 15 23 42 75 92 80 85 33 95 14

3. Add by skip counting by 5s.

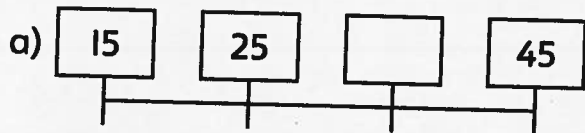
a) $5 + 5 + 5 + 5 = \underline{\quad}$

b) $65 + 5 + 5 + 5 = \underline{\quad}$

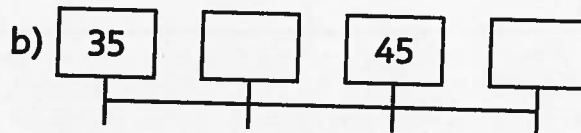
4. a) Skip count by 10s. 0 , 10 , 20 , _____ , _____ , _____ , _____ , _____

b) Describe any patterns you see in the ones and tens digits.

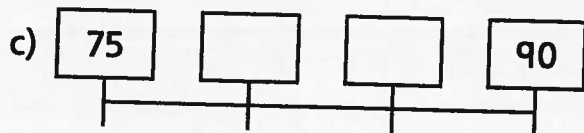
5. Amir skip counts by 5s or 10s. Write the number he counts by. Fill in the missing numbers.



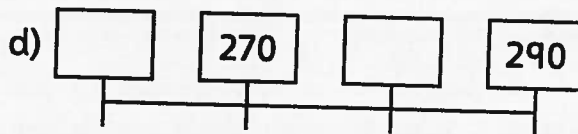
He counts by _____.



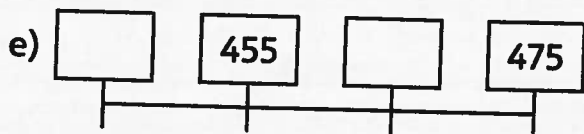
He counts by _____.



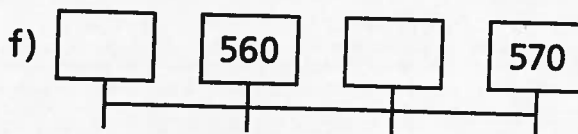
He counts by _____.



He counts by _____.



He counts by _____.



He counts by _____.

COPYRIGHT © 2016 JUMP MATH: NOT TO BE COPIED.

6. Explain how you knew which numbers to circle in Question 2.